


4

5% of £3600 =

[2004]




[1 mark]

5

15% of 460 =

[2001]



[1 mark]

6

200 children went on holiday.


[2014]

10% of the children went to Wales.

25% of the children went to Scotland.

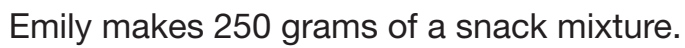
How many **more** children went to Scotland than went to Wales?

Show your method



[2 marks]

[2008]



How many grams of **peanuts** does she use?

[2 marks]

[2015]

--

[1 mark]

9

45% of 460 =

[2017]

[1 mark]

10

[2003]



250 000 people visited a theme park in one year.

15% of the people visited in April and

40% of the people visited in August.

How many people visited the park in the rest of the year?

Show your method

[2 marks]

11

[2016]

[1 mark]

12

[2016S]

[1 mark]

13

[2017]

A cartoon illustration of a grey and white tabby cat curled up and sleeping. The cat has its eyes closed and a peaceful expression. It is lying on its side, with its front paws tucked near its face and its hind legs tucked under its body. The background is plain white.


A koala sleeps for **18 hours** each day.

A cartoon illustration of a koala clinging to a tree branch. The koala is light gray with darker gray outlines and is shown in a yawn, with its mouth wide open in a large black oval. It has small, pointed ears and is holding onto the branch with its claws. The branch is brown and has several green leaves. The background is plain white.

[1 mark]

14**7% of 500 =**


[2017]



[1 mark]

15**15% \times 1,000 =**


[2017]



[1 mark]

16**If you know 40% of a number, explain how you could work out the original number.**

[2010]



[1 mark]

17


Liam did a survey of 55 people to see how many were left-handed.

[2014]

Liam says,

‘The results show that exactly 10% of the people in the survey are left-handed.’

Explain why Liam cannot be correct.



[1 mark]


18

20% of Megan's number is 64

[2013]

What is 50% of Megan's number?

Show your method



[2 marks]

Write in the missing numbers.

[2005]

30% of 60 is

--

30% of

is 60

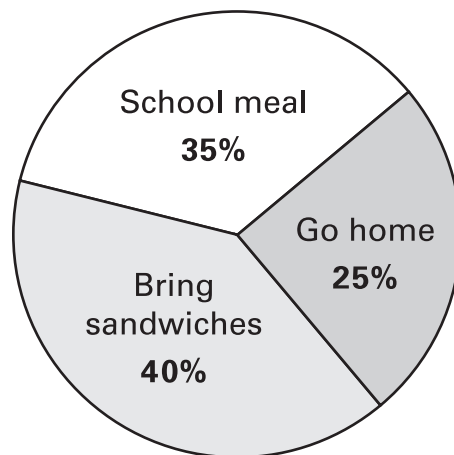
[2 marks]

20

[2000]



This pie chart shows the lunch choices of year 6 children at a school.



28 children in year 6 have a school meal.

How many **go home** for lunch?

Show your method

[2 marks]